

VIDYA BHAWAN BALIKA VIDYA PITH

CLASS- 4

DATE - 18. 01. 21

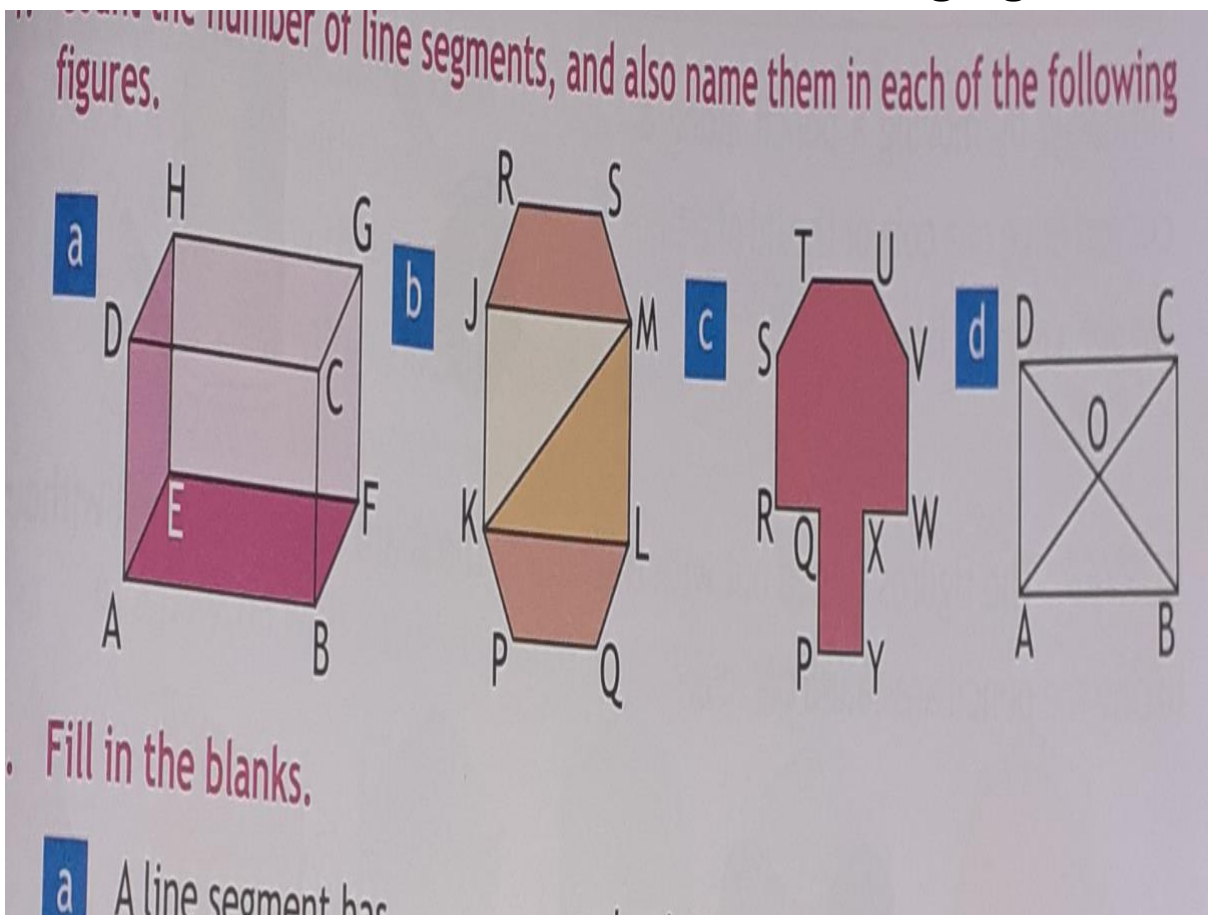
SUB – MATHS

S. T - PRAGYA

BASED ON N.C.E.R.T PATTERN

CH- PERIMETER AND AREA


1.Count the number of line segment , and also Name them in each of the following figures .



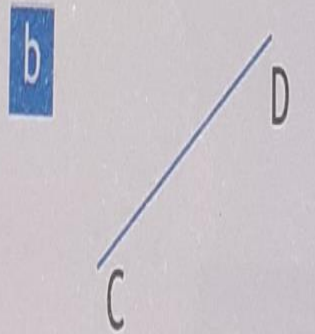
2. Measure the following line segments and fill In the blanks.

e A..... has a definite length.


Measure the following line segments and fill in the blanks.



$\overline{AB} = \dots\dots\dots$



$\overline{CD} = \dots\dots\dots$



$\overline{EF} = \dots\dots\dots$

Solve with figure.
